





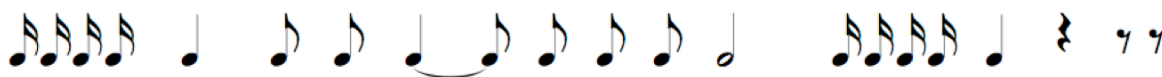
PRACTICE QUIZ #4c

Time limit: 5:30

Fill in the missing portions of the table below.

Meter Type	Meter Signature	Beat	Beat Division	Whole Measure
	8			
_____ duple				
	12			
simple triple				

The two rhythms below are identical. Re-notate them to reflect $\frac{3}{4}$ and $\frac{6}{8}$ correctly. You will need to add barlines and use beams, dots, ties, etc. appropriately. You may change the notation (for instance, you may write two tied quarter notes rather than a half note), but you must not alter the rhythm's sound.



$\frac{3}{4}$



$\frac{6}{8}$