





## PRACTICE QUIZ #4b

**Time limit: 5:30**

Fill in the missing portions of the table below.

Meter Type	Meter Signature	Beat	Beat Division	Whole Measure
compound triple	<b>16</b>			
				
_____ duple				
	<b>12</b>			

The two rhythms below are identical. Re-notate them to reflect  $\frac{3}{4}$  and  $\frac{6}{8}$  correctly. You will need to add barlines and use beams, dots, ties, etc. appropriately. You may change the notation (for instance, you may write two tied quarter notes rather than a half note), but you must not alter the rhythm's sound.



34



68